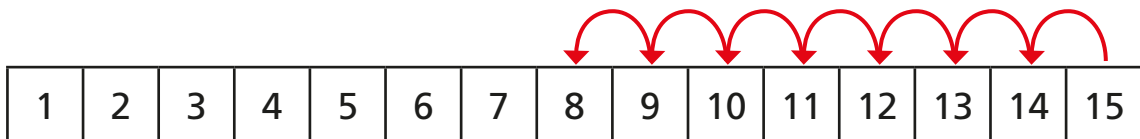



Subtraction – crossing 10 (counting back)

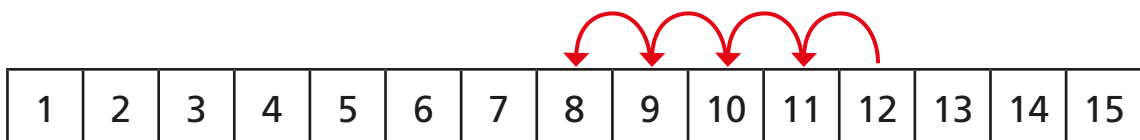
- 1 There are 15 cookies in a jar.
Mo eats 7 cookies.
He counts back 7 from 15



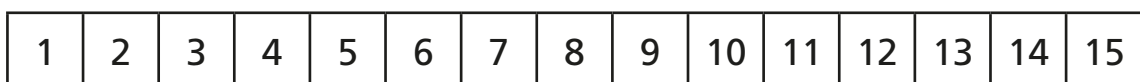
How many cookies does Mo have left?

- 2 Use the number tracks to help you.

a) $12 - 4 =$



b) $12 - 5 =$



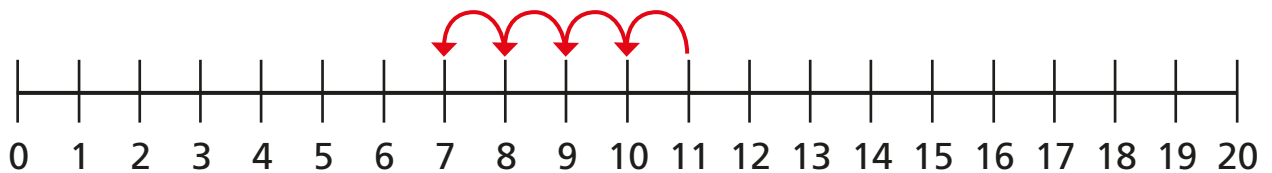
c) $12 - 7 =$



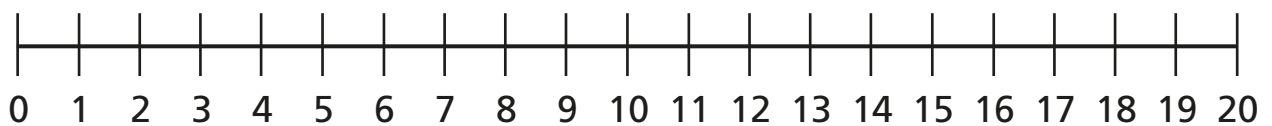
3 Use the number lines to help you.



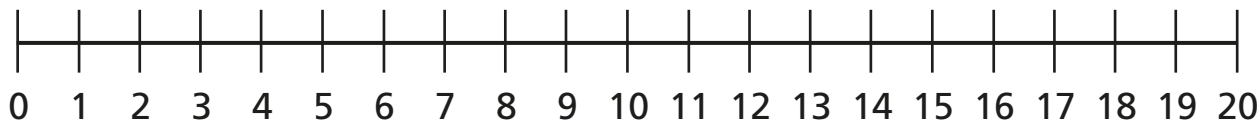
a) $11 - 4 =$



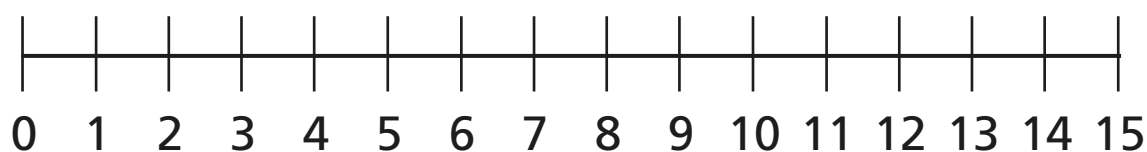
b) $16 - 9 =$



c) $14 - 11 =$



- 4** There are 13 toys in a box.
Kim takes some toys out of the box.
There are 5 toys left in the box.
How many toys does Kim take out of the box?



Kim takes toys out of the box.

