





21st May	
$255 + 17$  <div style="border: 1px solid black; padding: 5px; display: inline-block;">272</div>	16×0 <div style="border: 1px solid black; padding: 5px; display: inline-block;">0</div>
$77 \xrightarrow{\text{is 22 more than}} 55$ <div style="border: 1px solid black; padding: 5px; display: inline-block;"> </div> $\xrightarrow{\text{is 22 more than}} 39$	61
Mo has 91 strawberries He eats 53 of them How many strawberries does he have left? 38	 
Natalie has 10 fifty pence pieces 	How much money does Natalie have? £5