

Name: Amey

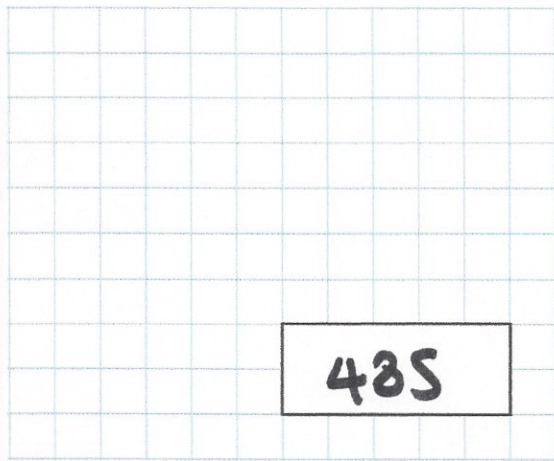
Primary 5-a-day

Bronze



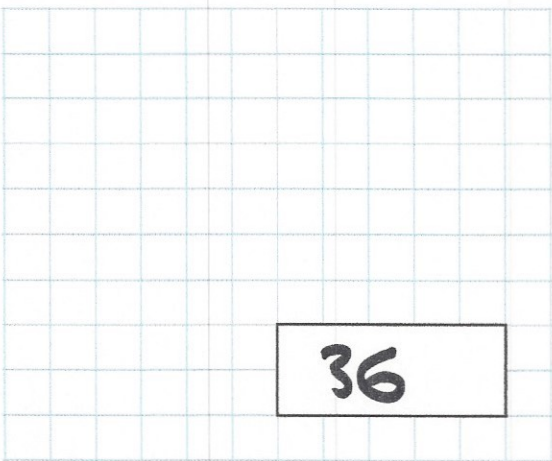
29th April

$455 + 30$



485

$6 \times 6$



36

Nine hundred and twenty people visited a museum.

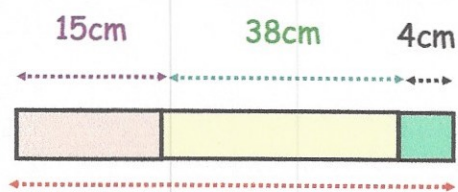
Write **nine hundred and twenty** in figures

920

Michael put a pink block, yellow block and blue block beside each other

Work out the total length

$$38 + 4 + 15 =$$



57 cm

How many seconds are in 4 minutes?

$$4 \times 60 = \underline{\underline{240}}$$

